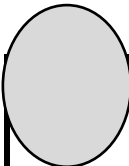


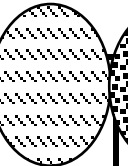








Wykonaj zakodowane działania.

|   |   |   |   |   |   |  |   |   |   |
|---|---|---|---|---|---|--|---|---|---|
|  |  |  |  |  |  |  |  |  |  |
| <b>1</b>  | <b>2</b>  | <b>3</b>  | <b>4</b>  | <b>5</b>  | <b>6</b>  | <b>7</b>   | <b>8</b>  | <b>9</b>  | <b>10</b>   |

$$\text{1} + \text{2} = \square$$

$$\text{9} - \text{3} = \square$$

$$\text{3} + \text{3} = \square$$

$$\text{8} - \text{6} = \square$$

$$\text{9} + \text{1} = \square$$

$$\text{8} - \text{2} = \square$$

$$\text{5} + \text{5} = \square$$

$$\text{3} - \text{3} = \square$$

$$\text{8} + \text{1} = \square$$

$$\text{9} - \text{4} = \square$$

$$\text{7} + \text{4} = \square$$

$$\text{7} - \text{2} = \square$$

$$\text{1} + \text{9} = \square$$

$$\text{3} - \text{6} = \square$$

$$\text{3} + \text{6} = \square$$

$$\text{9} - \text{5} = \square$$